



Lodge Farm Primary School

Year 2 Term: Spring 2

English

Key Content:

This half term, our class reading books are *Puss in Boots* by Vera Southgate and *The Gruffalo* by Julia Donaldson. Children will use their knowledge of these stories to write a range of genres: traditional tales, letters and recounts. They will plan, write, proof read, edit and produce a final 'best' version for each genre.



Spellings

Children will bring home 10 spellings every week and will be tested every Friday. Please ensure that they practise their spellings throughout the week using the Spelling Shed website in preparation for their spelling test.

BoomReader

Please help your child by ensuring that they read for at least 15 minutes each night and use the BoomReader app to log this information.

Curriculum Driver:

Healthy Lifestyle

Maths

Key Content:

This half term, our class will cover:

Length and Height

Children need to be able to:

- Choose and use appropriate standard units to estimate and measure length/height in any direction (m/cm); mass (kg/g); temperature (°C); capacity (litres/ml) to the nearest appropriate unit using rulers, scales, thermometers and measuring vessels
- Compare and order lengths, mass, volume/capacity and record the results using greater than, less than and =
- Solve problems with addition and subtraction using concrete objects and pictorial representations, including those involving numbers, quantities and measures
- Solve problems involving multiplication and division, using materials, arrays, repeated addition, mental methods, and multiplication and division facts, including problems in contexts.

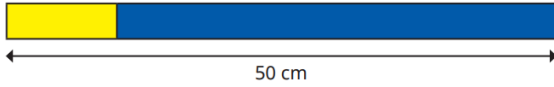
Here is a strip of yellow paper.



A blue strip of paper is 4 times longer than the yellow strip.



The strips are joined end to end.



How long is the yellow strip?

How long is the blue strip?

Choose a phrase to compare the lengths.

longer than

shorter than

the same as

▶ 15 cm is _____ 60 cm.

▶ Sixty metres is _____ 60 m.

▶ 96 m is _____ 69 m.

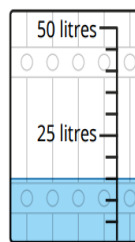
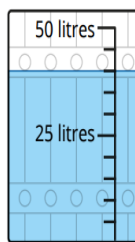
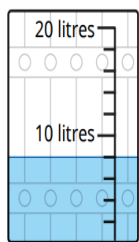
▶ 1 cm is _____ 1 m.

Mass, Capacity and Temperature

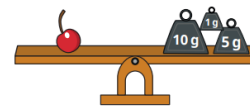

Children need to be able to:

- Choose and use appropriate standard units to estimate and measure length/height in any direction (m/cm); mass (kg/g); temperature (°C); capacity (litres/ml) to the nearest appropriate unit, using rulers, scales, thermometers and measuring vessels
- Compare and order lengths, mass, volume/capacity and record the results using greater than, less than and =
- Choose and use appropriate standard units to estimate and measure length/height in any direction (m/cm); mass (kg/g); temperature (°C); capacity (litres/ml) to the nearest appropriate unit, using rulers, scales, thermometers and measuring vessel
- Compare and order lengths, mass, volume/capacity and record the results using greater than, less than and =

How much liquid is there in each barrel?



Complete the sentences.



The mass of the strawberry is _____ g.

The mass of the cherry is _____ g.

The total mass of a strawberry and a cherry is _____ g.

TT Rockstars

Times Tables Rock Stars is a carefully sequenced programme of daily times tables practice. Children should be logging on weekly at home to practice their times table recall.

Curriculum Driver: Communication